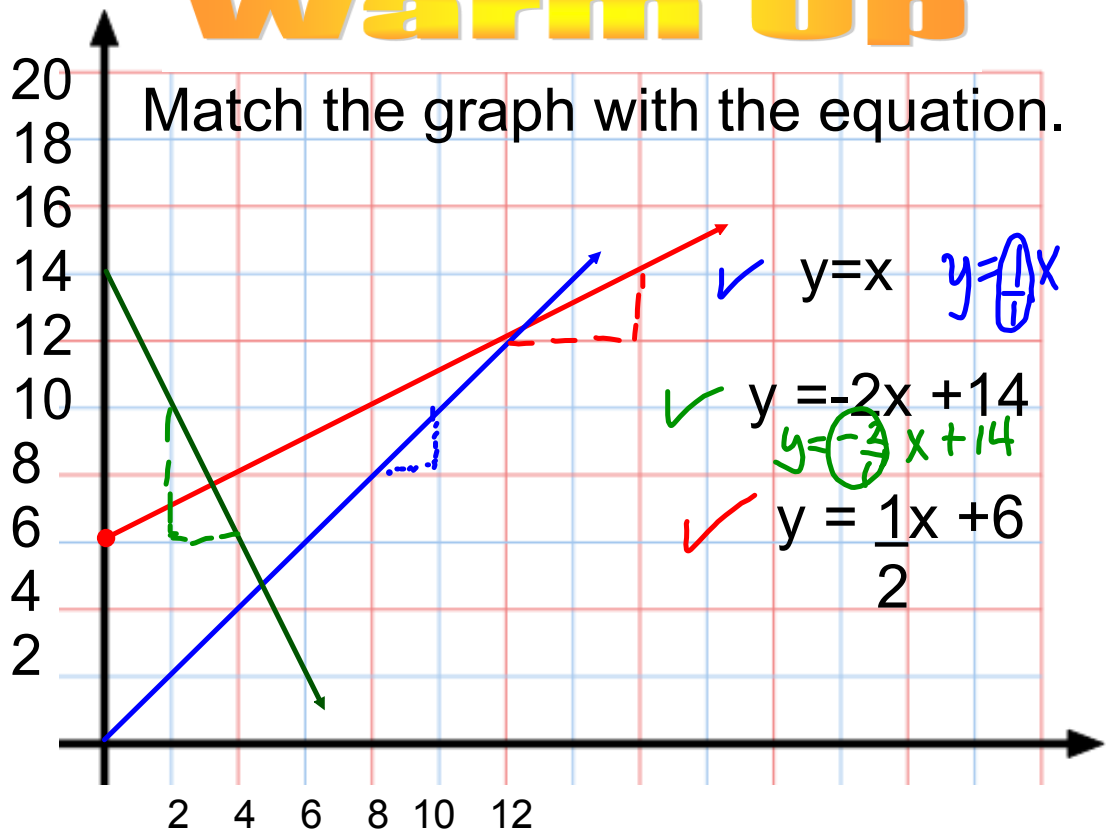


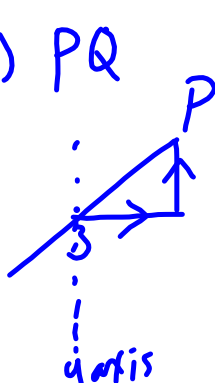
Warm Up



Homework Questions??

Page 190

12. a) PQ



$$y = mx + b$$

$$y = \frac{1}{2}x + 3$$

b) QR

$$y = 0x + 1$$

$$y = 1$$

c) RP

$$m = \frac{2}{-1}$$

$$y = mx + b$$

$$y = \frac{-2}{1}x + \boxed{8}$$

$$= -2x + 8$$

Equation Sheet

1) $y = 3x - 5$

| X | Y |
|----|----|
| -1 | -8 |
| 0 | -5 |
| 1 | -2 |

Graph (4)

2) $y = 2x - 4$

| X | Y |
|----|----|
| -1 | -6 |
| 0 | -4 |
| 1 | -2 |

graph (6)

3) $y = -4x$

| X | Y |
|----|----|
| -1 | 4 |
| 0 | 0 |
| 1 | -4 |

graph (1)

4) $y = -x + 1$

| X | Y |
|----|---|
| -1 | 2 |
| 0 | 1 |
| 1 | 0 |

graph (8)

5) $y = -4x - 3$

| X | Y |
|----|----|
| -1 | 1 |
| 0 | -3 |
| 1 | -8 |

graph (12)

6) $y = x$

| X | Y |
|----|----|
| -1 | -1 |
| 0 | 0 |
| 1 | 1 |

graph (9)

7) $y = \frac{5}{3}x - 5$

| X | Y |
|----|-----|
| -3 | -10 |
| 0 | -5 |
| 3 | 0 |

graph (11)

8) $y = \frac{1}{2}x + 1$

| X | Y |
|----|---|
| -2 | 0 |
| 0 | 1 |
| 2 | 2 |

graph (16)

9) $y = \frac{2}{5}x + 2$

| X | Y |
|----|---|
| -5 | 0 |
| 0 | 2 |
| 5 | 4 |

graph (5)

10) $y = \frac{1}{2}x - 2$

| X | Y |
|----|----|
| -2 | -3 |
| 0 | -2 |
| 2 | -1 |

graph (7)

11) $y = x + 4$

| X | Y |
|----|---|
| -1 | 3 |
| 0 | 4 |
| 1 | 5 |

graph (3)

12) $y = \frac{5}{4}x + 5$

| X | Y |
|----|----|
| -4 | 0 |
| 0 | 5 |
| 4 | 10 |

graph (13)

13) $y = 2x - 1$

| X | Y |
|----|----|
| -1 | -3 |
| 0 | -1 |
| 1 | 1 |

graph (2)

14) $y = \frac{1}{2}x + 2$

| X | Y |
|----|---|
| -2 | 3 |
| 0 | 2 |
| 2 | 1 |

graph (15)

15) $y = 5x + 4$

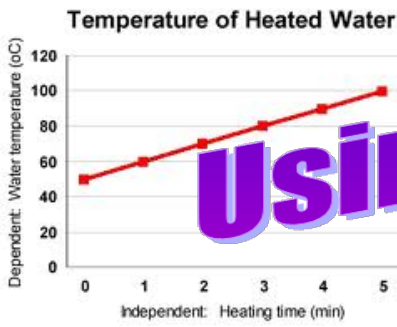
| X | Y |
|----|----|
| -1 | -1 |
| 0 | 4 |
| 1 | 9 |

graph (10)

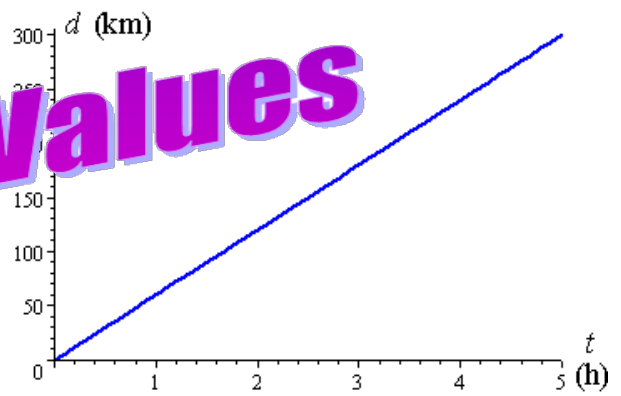
16) $y = \frac{2}{5}x - 1$

| X | Y |
|----|----|
| -5 | 1 |
| 0 | -1 |
| 1 | -3 |

arr. L (14)



**Using Graphs
to
Estimate Values**

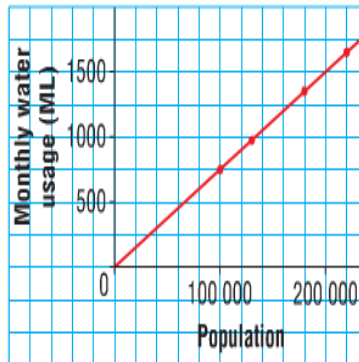


A city has grown over the past few years. This table and graph show how the volume of water used each month is related to the population.

| Population | Monthly Water Usage (ML) |
|------------|--------------------------|
| 100 000 | 750 |
| 130 000 | 975 |
| 180 000 | 1350 |
| 220 000 | 1650 |

1 ML is 1 000 000 L.

Water Usage in One City

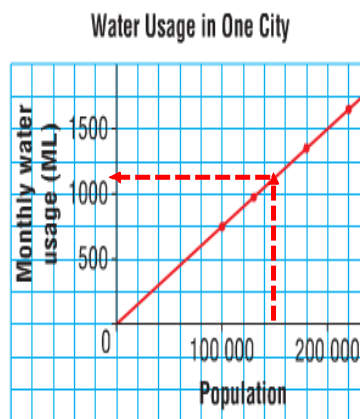


- Estimate the monthly water usage for a population of 150 000 people.
- Predict the water usage for 250 000 people.

- a) A city has grown over the past few years. This table and graph show how the volume of water used each month is related to the population.

| Population | Monthly Water Usage (ML) |
|------------|--------------------------|
| 100 000 | 750 |
| 130 000 | 975 |
| 180 000 | 1350 |
| 220 000 | 1650 |

1 ML is 1 000 000 L.



Estimate the monthly water usage for a population of 150 000 people.

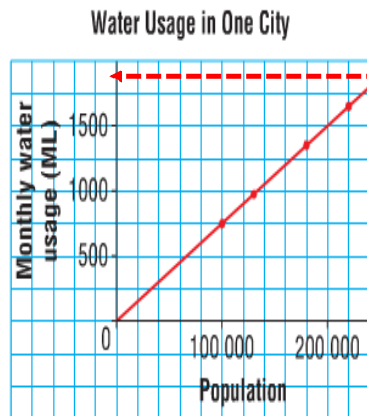
Interpolation... estimate values that lie between two data points

b)

A city has grown over the past few years. This table and graph show how the volume of water used each month is related to the population.

| Population | Monthly Water Usage (ML) |
|------------|--------------------------|
| 100 000 | 750 |
| 130 000 | 975 |
| 180 000 | 1350 |
| 220 000 | 1650 |

1 ML is 1 000 000 L.

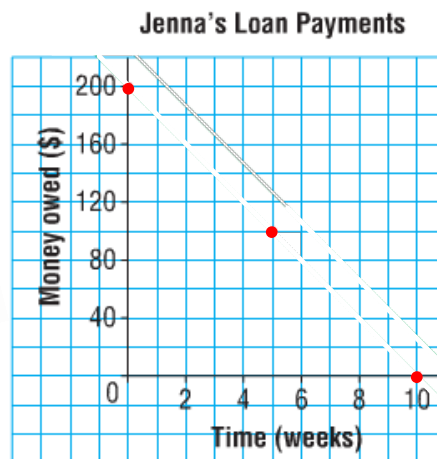


Predict the water usage for 250 000 people.

Use a ruler to extend the line.

Extrapolation... estimate values that lie outside the given data points

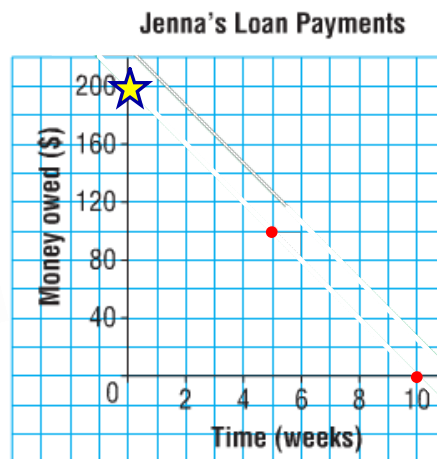
Jenna borrows money from her parents for a school trip. She repays the loan by making regular weekly payments. The graph shows how the money is repaid over time. The data are discrete because payments are made every week.



- How much money did Jenna originally borrow?
- How much money does she still owe after 3 weeks?
- How many weeks will it take Jenna to repay one-half of the money she borrowed?



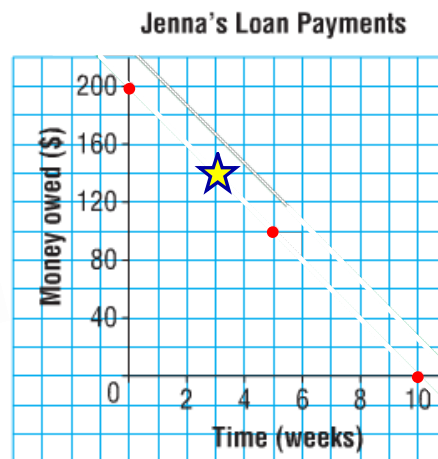
Jenna borrows money from her parents for a school trip. She repays the loan by making regular weekly payments. The graph shows how the money is repaid over time. The data are discrete because payments are made every week.



- a) How much money did Jenna originally borrow?

Jenna borrowed \$200.

Jenna borrows money from her parents for a school trip. She repays the loan by making regular weekly payments. The graph shows how the money is repaid over time. The data are discrete because payments are made every week.

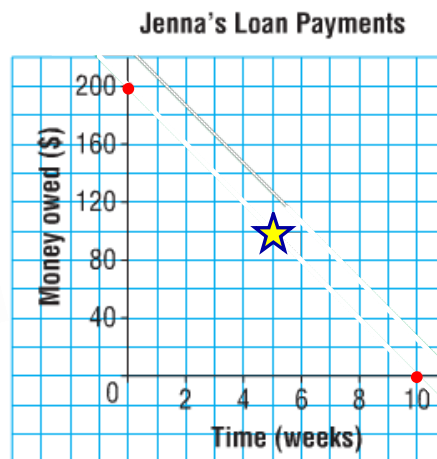


b) How much money does she still owe after 3 weeks?

**Jenna owes
\$140 after 3
weeks.**



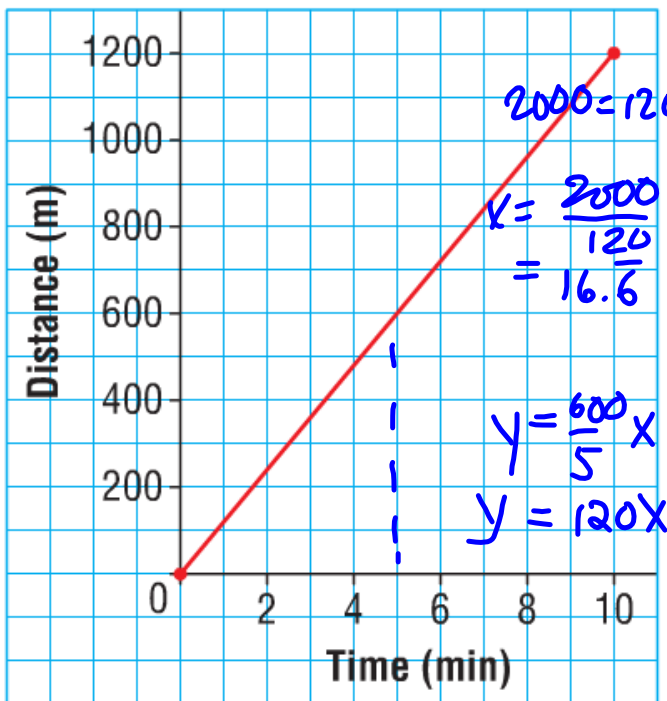
Jenna borrows money from her parents for a school trip. She repays the loan by making regular weekly payments. The graph shows how the money is repaid over time. The data are discrete because payments are made every week.



- c) How many weeks will it take Jenna to repay one-half of the money she borrowed?

It will take Jenna 5 weeks to pay one-half of them money back.

Maya's Jog

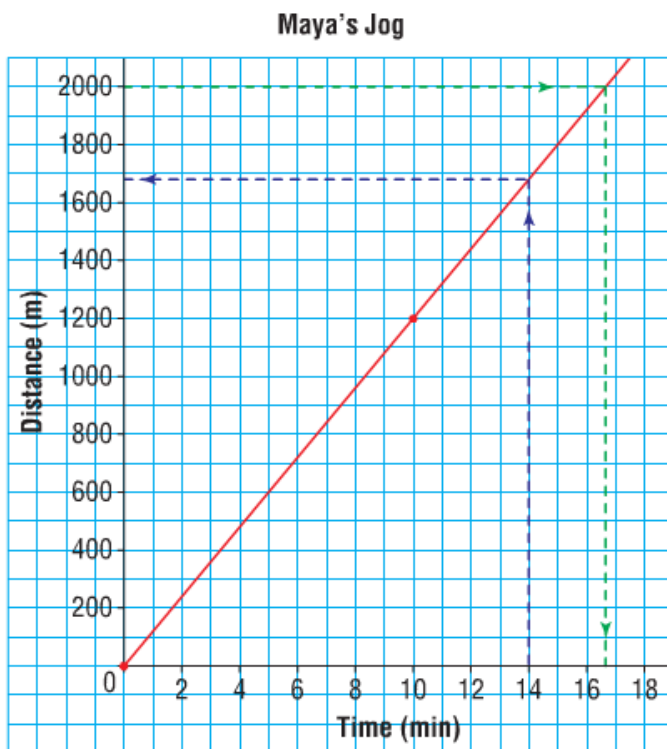


Use the graph.

- a) Predict how long it will take Maya to jog 2000 m.
- b) Predict how far Maya will jog in 14 min.
- c) What assumption did you make?

$$y = 120(14)$$

You must use extrapolation. :)



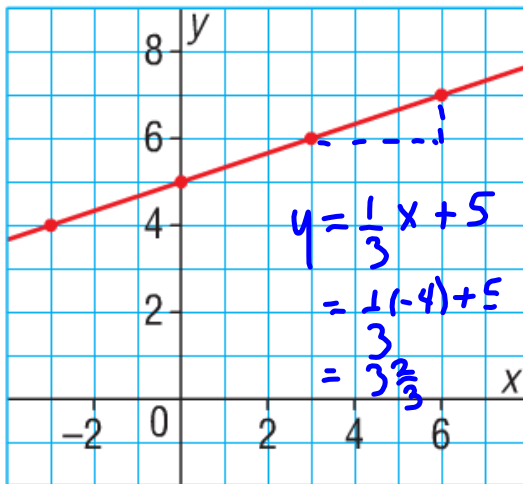
Use the graph.

- Predict how long it will take Maya to jog 2000 m.
- Predict how far Maya will jog in 14 min.
- What assumption did you make?

Answers:

- It will take Maya about 16.5 minutes to jog 2000m.
- Maya will jog about 1690m in 14 minutes.

Which questions can be answered using interpolation?



Determine the values of y for each of the following values of x .

- a) $x = -3$ $y = 4$
 b) $x = 6$ $y = 7$
 c) $x = -4$ $y = 3.3 \rightarrow 3.\bar{6}$

Determine the values of x for each of the following values of y .

- a) $y = 3$ $x = -6$
 b) $y = 7$ $x = 6$
 c) $y = 2$

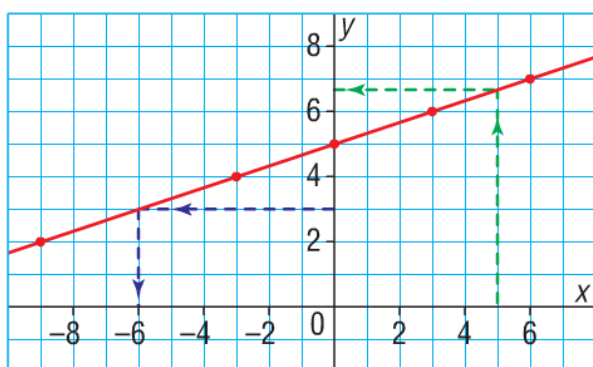
Which questions will have to be answered using extrapolation?

$$y = \frac{1}{3}x + 5$$

$$3 = \frac{1}{3}x + 5$$

$$-2 = \frac{1}{3}x$$

$$x = -6$$



Determine the values of y for each of the following values of x .

- a) $x = -3$
- b) $x = 6$
- c) $x = -4$

Determine the values of x for each of the following values of y .

- a) $y = 3$
- b) $y = 7$
- c) $y = 2$

Class / Homework

Pages 196 - 198
4 - 14