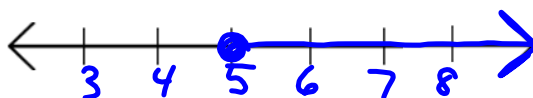


Warm up

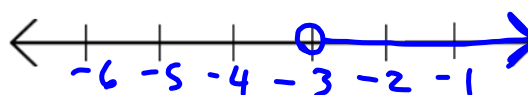
February 18

Solve and graph the following equations

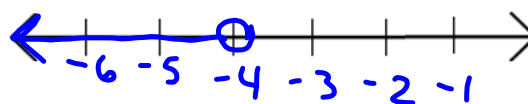
1. $x \geq 5$



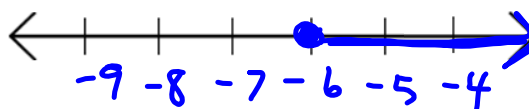
2. $-3 < b$
 $b > -3$



3. $\frac{-f}{-1} > \frac{4}{-1}$
 $f < -4$



4. $-2^4 \leq 4^4 + h$
 $-6 \leq h$
 $h \geq -6$



Class / Homework

Inequality worksheets 2 & 3