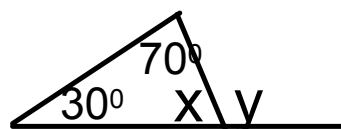
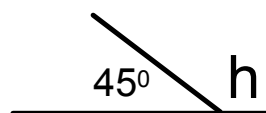
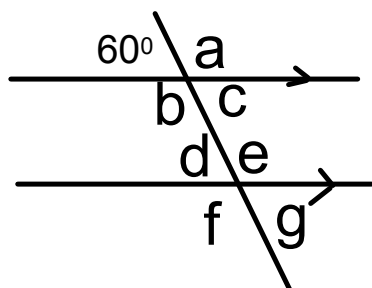


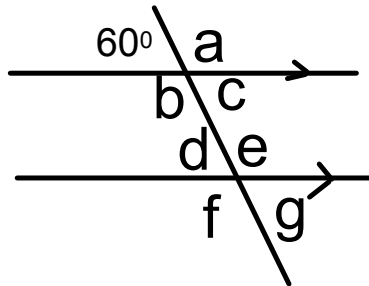
Warm up

Find the missing values. Provide reasons for your answer.

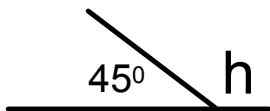


Warm up

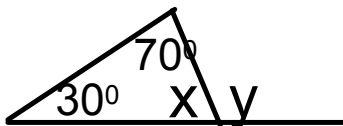
Find the missing values. Provide reasons for your answer.



$$\begin{aligned} a &= 120^\circ && \text{SAT} \\ b &= 120^\circ && \text{OAT} \\ c &= 60^\circ && \text{OAT} \\ d &= 60^\circ && \text{CIA} \\ e &= 120^\circ && \text{CIA} \\ f &= 120^\circ && \text{CA} \\ g &= 60^\circ && \text{SAT} \end{aligned}$$



$$h = 135^\circ \quad \text{SAT}$$



$$x = 80^\circ \quad \text{SAT, T}$$

$$y = 100^\circ \quad \text{SAT, EAT}$$

HOMEWORK...

p. 284 #1 - 7 (omit #4 & 6)

7.1 - Build Your Skills Detailed Solutions.pdf

